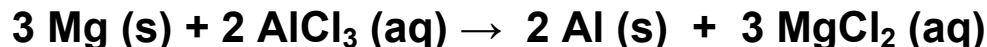



For each of the following indicate that type of reaction and the final balanced equation:



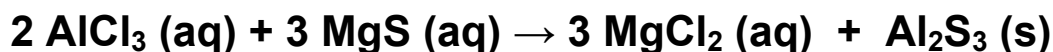
Reaction Type: Single Replacement

---



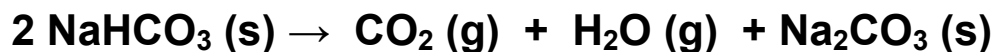
Reaction Type: Combustion

---




Reaction Type: Double Replacement

---



Reaction Type: Decomposition

---




Reaction Type: Double Replacement

---



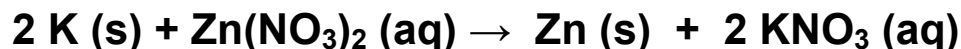
Reaction Type: Decomposition

---



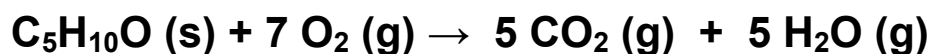
Reaction Type: Double Replacement

---



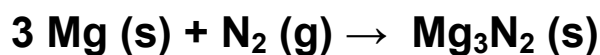
Reaction Type: Single Replacement

---



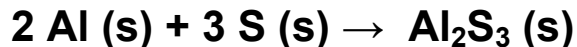
Reaction Type: Combustion

---



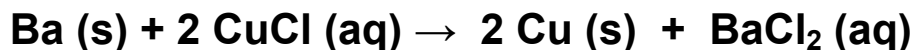
Reaction Type: Combination

---



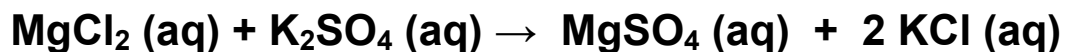
Reaction Type: Combination

---



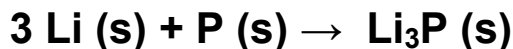
Reaction Type: Combination

---




Reaction Type: Double Replacement

---



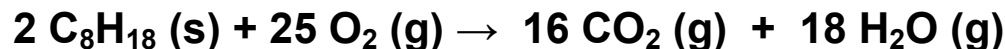
Reaction Type: Combination

---



Reaction Type: Double Replacement

---



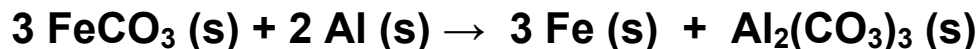
Reaction Type: Combustion

---




Reaction Type: Decomposition

---



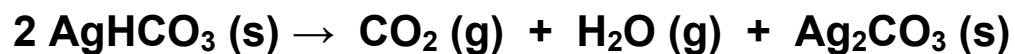
Reaction Type: Single Replacement

---




Reaction Type: Double Replacement

---



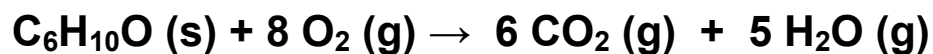
Reaction Type: Decomposition

---



Reaction Type: Double Replacement

---



Reaction Type: Combustion

---



Reaction Type: Decomposition